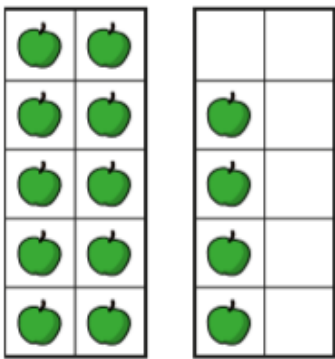
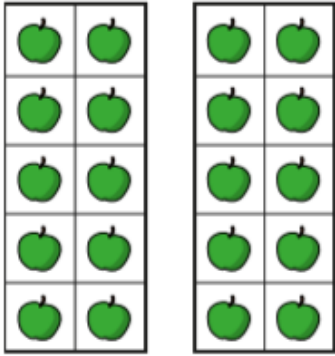


12.1.2021

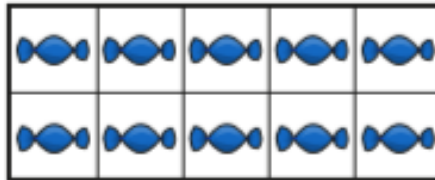
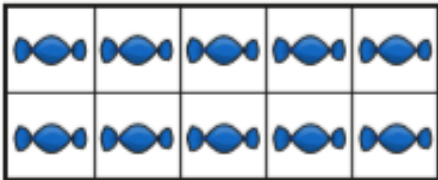
1. How many apples are there?



There are \_\_\_\_\_ tens and \_\_\_\_\_ ones.

There are \_\_\_\_\_ apples.

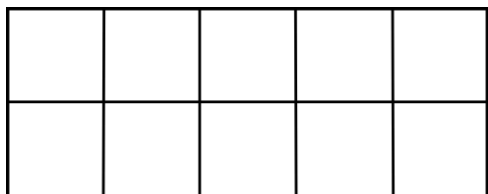
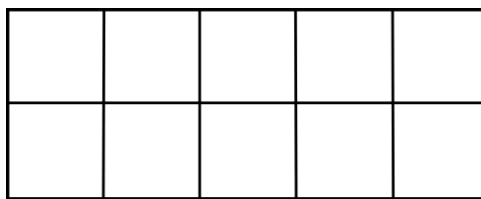
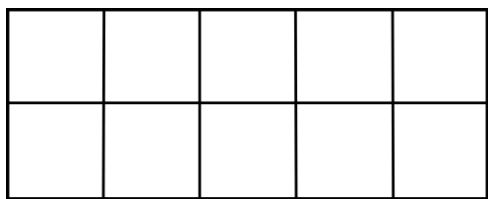
2. How many sweets are there?



There are \_\_\_\_\_ tens and \_\_\_\_\_ ones.

There are \_\_\_\_\_ apples.

3. I have 28 counters. Can you draw the counters on the 10 grids to show the correct number?





4. I have 32 oranges.

There are \_\_\_\_\_ tens and \_\_\_\_\_ ones.

5. I have 41 fish.

There are \_\_\_\_\_ tens and \_\_\_\_\_ ones.

6. Tom says there are 19 bees. Is he correct?



Circle

Yes

No

Explain your answer.

