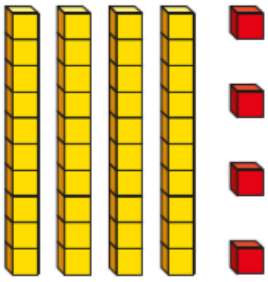


12.1.2021

1. What number is shown?

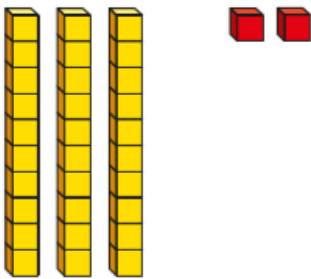


There are _____ tens and _____ ones.

10, 20, _____, 40, 41, 42, 43, _____

The number shown is _____.

2. What number is shown?

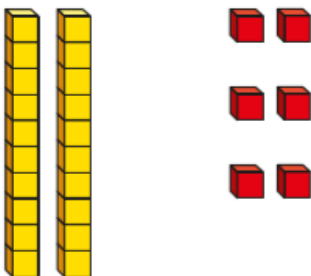


There are _____ tens and _____ ones.

_____, 20, _____, 31, _____

The number shown is _____.

3. What number is shown?



There are _____ tens and _____ ones.

_____, _____, 21, 22, 23, 24, _____, _____

The number shown is _____.

4. Draw base 10 (tens and ones) to show these numbers.


23

3 tens and 5 ones



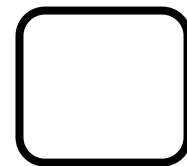
5. Eva and Jack are making the same number.

Eva's number has these tens.

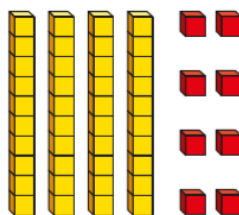


Jack's number has nine ones.

What number are Eva and Jack making?



6. Lily has made 84. Is she correct? Yes/No



Explain your answer. _____